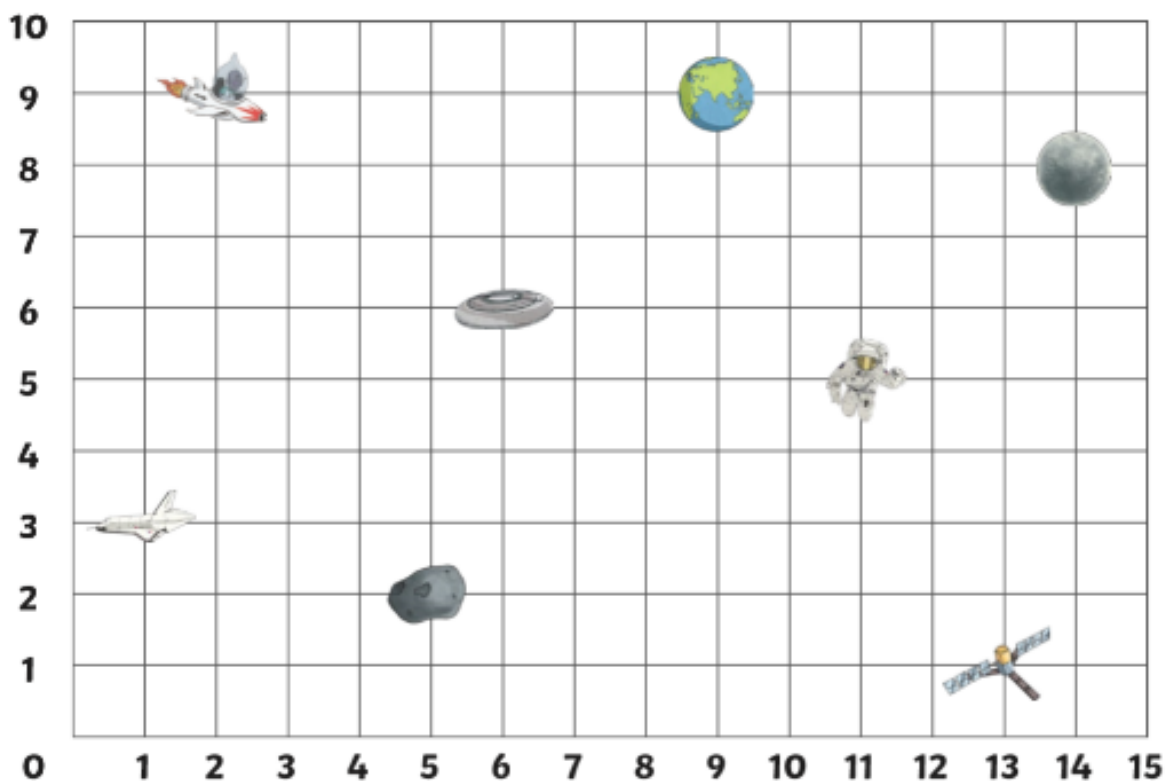










Space Coordinate Translations

Write the coordinates of the space objects, then translate them
and write the new coordinate:



Space Object	Original Coordinate	Translation	Finishing Coordinate
	(,)	Left 6, Down 7	(,)
	(,)	Right 8, Down 4	(,)
	(,)	Left 7, Up 3	(,)
	(,)	Right 5, Up 4	(,)
	(,)	Left 9, Down 6	(,)
	(,)	Right 1, Up 7	(,)




2D Shape Symmetry

I can recognise lines of symmetry in 2D shapes presented in different positions.



Find and draw the lines of symmetry on these 2D shapes.

Use a ruler and mirror to help.



Missing Number 3-Digit Addition

Calculate the missing numbers in these calculations.

$$\begin{array}{r} _ _ 38 \\ + 4 _ 7 \\ \hline 128 _ \end{array}$$

$$\begin{array}{r} 1 _ 9 \\ + _ 8 _ \\ \hline 524 \end{array}$$

$$\begin{array}{r} 27 _ \\ + 8 _ 8 \\ \hline _ _ 52 \end{array}$$

$$\begin{array}{r} _ 77 \\ + 6 _ 2 \\ \hline 154 _ \end{array}$$

$$\begin{array}{r} 8 _ 6 \\ + _ 44 \\ \hline 129 _ \end{array}$$

$$\begin{array}{r} _ 89 \\ + 2 _ 1 \\ \hline 45 _ \end{array}$$

$$\begin{array}{r} 37 _ \\ + 7 _ 3 \\ \hline _ _ 36 \end{array}$$

$$\begin{array}{r} _ 31 \\ + 96 _ \\ \hline 10 _ 2 \end{array}$$

$$\begin{array}{r} 1 _ 2 \\ + _ 69 \\ \hline 115 _ \end{array}$$

$$\begin{array}{r} _ 88 \\ + 35 _ \\ \hline 7 _ 7 \end{array}$$

$$\begin{array}{r} _ _ 2 \\ + 6 _ 2 \\ \hline 1341 \end{array}$$

$$\begin{array}{r} 9 _ 7 \\ + _ 6 _ \\ \hline 1294 \end{array}$$

$$\begin{array}{r} 9 _ _ \\ + _ 31 \\ \hline 1857 \end{array}$$

$$\begin{array}{r} 9 _ 0 \\ + 31 _ \\ \hline _ _ 18 \end{array}$$

$$\begin{array}{r} 8 _ 8 \\ + _ 2 _ \\ \hline 1505 \end{array}$$

$$\begin{array}{r} 91 _ \\ + 3 _ 5 \\ \hline _ _ 24 \end{array}$$

$$\begin{array}{r} 5 _ 0 \\ + _ 83 \\ \hline 140 _ \end{array}$$

$$\begin{array}{r} 6 _ _ \\ + _ 45 \\ \hline 1608 \end{array}$$

$$\begin{array}{r} _ 09 \\ + 7 _ _ \\ \hline 989 \end{array}$$

$$\begin{array}{r} 1 _ 5 \\ + _ 36 \\ \hline 85 _ \end{array}$$

$$\begin{array}{r} _ 55 \\ + 5 _ 1 \\ \hline _ 76 \end{array}$$

$$\begin{array}{r} 53 _ \\ + 8 _ 9 \\ \hline _ _ 79 \end{array}$$

$$\begin{array}{r} 70 _ \\ + 1 _ 5 \\ \hline _ 88 \end{array}$$

$$\begin{array}{r} 64 _ \\ + 5 _ 8 \\ \hline _ _ 82 \end{array}$$

$$\begin{array}{r} 3 _ 9 \\ + _ 7 _ \\ \hline 1032 \end{array}$$

$$\begin{array}{r} 9 _ 8 \\ + _ 41 \\ \hline 176 _ \end{array}$$

$$\begin{array}{r} 3 _ 2 \\ + _ 2 _ \\ \hline 577 \end{array}$$

$$\begin{array}{r} 9 _ 1 \\ + _ 28 \\ \hline 163 _ \end{array}$$

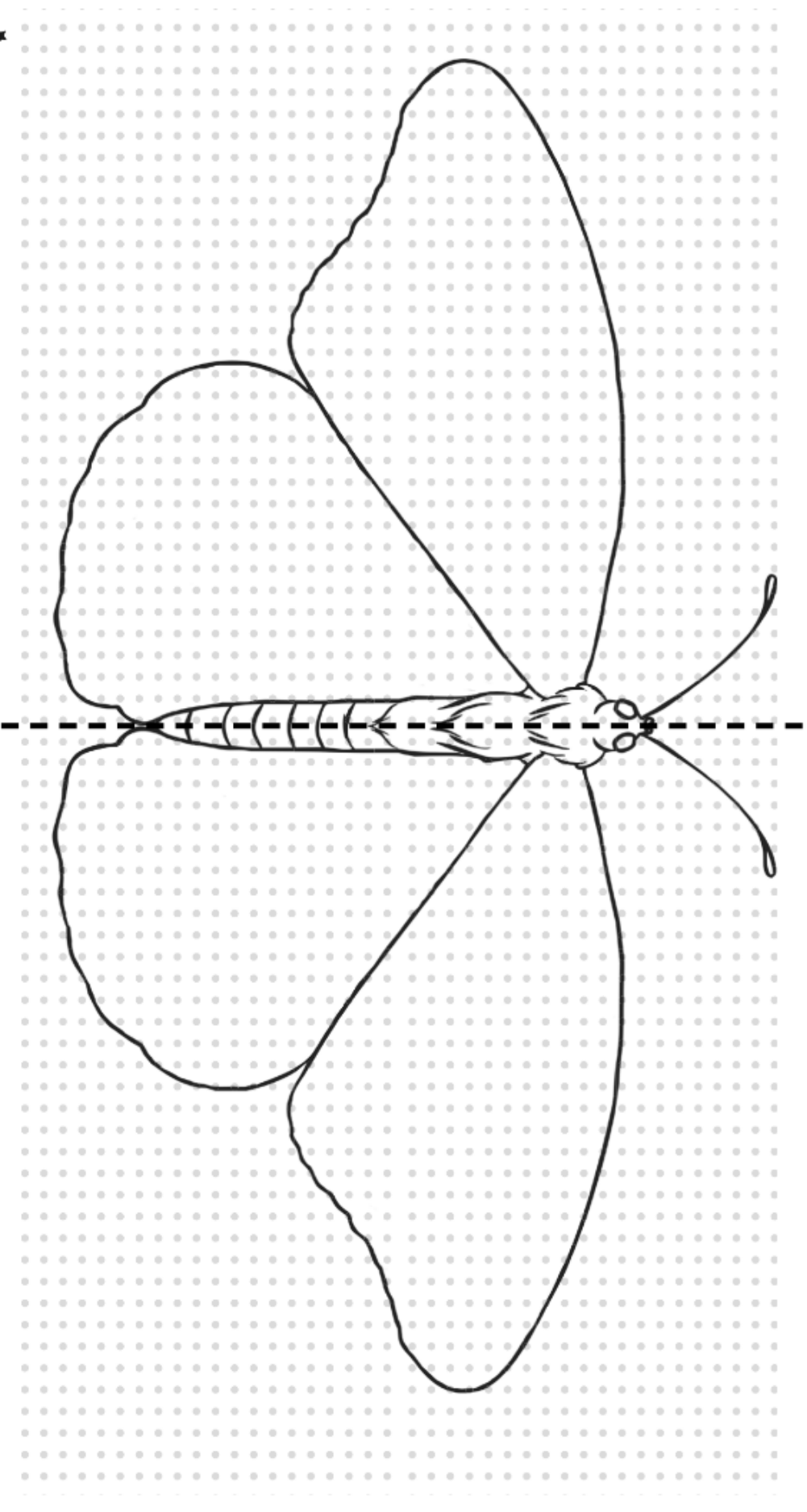
$$\begin{array}{r} _ 97 \\ + 5 _ 1 \\ \hline 76 _ \end{array}$$

$$\begin{array}{r} 434 \\ + 8 _ _ \\ \hline _ _ 58 \end{array}$$



Symmetrical Butterflies

Complete a symmetrical butterfly using 2D shapes including pentagons and hexagons in different positions.





Verb Tenses Past and Present

I can use the standard English forms of verb inflections.



1. Underline the present tense verb in each sentence. Then re-write the sentences with each verb changed into past tense and underline it. The first one is completed.

a) The man drives slowly.

The man drove slowly.

b) The children laugh at a picture.

c) She chases her brother.

d) The children bring their bags to school.

e) We eat our BBQ in the garden.

f) The sunflower grows taller and taller.

g) The girl keeps talking.

Get Ready with Cleopatra

- 11 To look as fabulous as me, follow these simple beauty steps.
- 22 First, bathe in milk and honey to keep your skin nourished
- 34 and soft. I scrub away the dead skin using sea salt and
- 47 then I like to use crushed green grapes to give my skin a
- 49 golden glow.
- 60 I usually keep my makeup quite simple and natural. I crush
- 72 up lapis lazuli stone to create a deep blue eye shadow base
- 83 and then I add some sparkle with little chunks of gold
- 92 pyrite. Next, I make my eyelashes and eyebrows darker
- 103 using charcoal and animal fat. Then, I just rub some red
- 115 clay into my lips and cheeks and I'm ready to head down
- 121 to the pyramids for the day.



Quick Questions



1. Through whose eyes is this text told?

2. Find and copy a phrase which shows that Cleopatra thinks that she looks good.

3. 'I usually keep my makeup quite simple and natural.' What makes you think that this is not true?

4. Explain why Cleopatra does not use the same makeup products that women use today.

An Extract from Howard Carter's Diary

4th November 1922

- 11 After the discovery of the first step, we exposed fifteen more
20 steps leading down to an ancient doorway, still sealed
31 after all these years. The name on the door was clear:
41 Tutankhamen. They say this tomb is cursed; they say that
49 the ancient pharaoh threatened anyone who disturbed his
62 peace in the afterlife but that will not stop me. For five years
72 we have been digging through the inhospitable desert and I
80 am finally about to make the most important
87 discovery of my life. At last, I
94 will be the one to unearth the
99 final resting place of Egypt's
102 youngest pharaoh. It
106 will be filled with
108 treasures beyond
110 anyone's wildest
111 dreams.



Quick Questions



1. In what year was this text written?



2. Do you think Howard Carter was scared? Use evidence from the text to support your answer.



3. Sum up the main points of this extract in 20 words or less.



4. What do you think happened next?



Plural-Tastic!

I can use possessive apostrophes with plurals.



1. Sort the words below into the table. The first ones have been done for you.

ponies'

flower's

child's

church's

children's





city's

pony's

cities'

flowers'

churches'

Picture	Singular (only one)	Plural (more than one)
a) 	<i>child's</i>	<i>children's</i>
b) 		
c) 		
d) 		
e) 